


Can you add
these numbers
together?

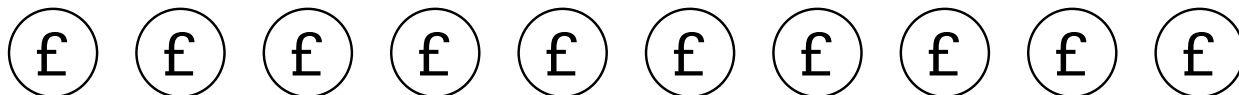


Money Maths: Addition

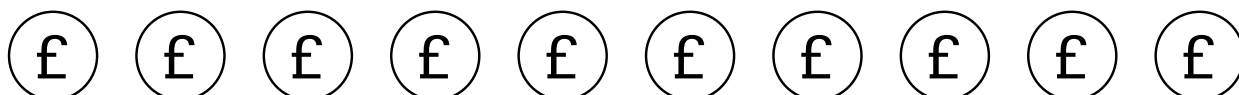
Colour the coins to help you add the numbers together.

Write your answer in the box.

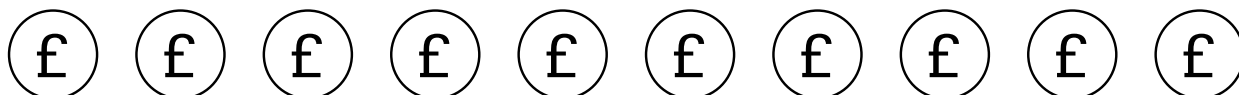
$$4 + 3 = \boxed{}$$



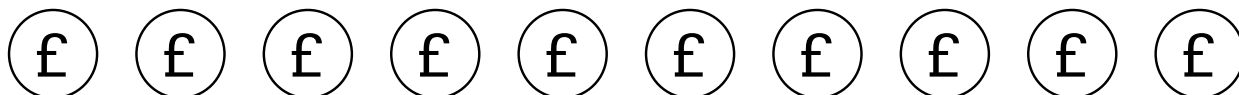
$$8 + 1 = \boxed{}$$



$$2 + 3 = \boxed{}$$



$$6 + 2 = \boxed{}$$



$$5 + 5 = \boxed{}$$

